

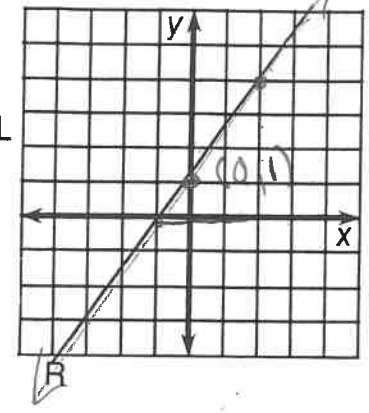
Key

Why Does a Poor Man Drink Coffee?

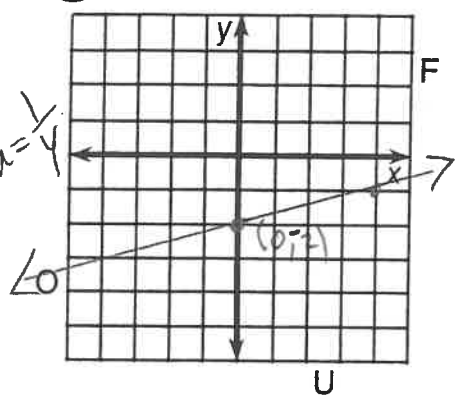
Use the slope and y-intercept to graph each equation below. The graph, if extended, will cross a letter. Print this letter in each box that contains the number of that exercise.

20
38

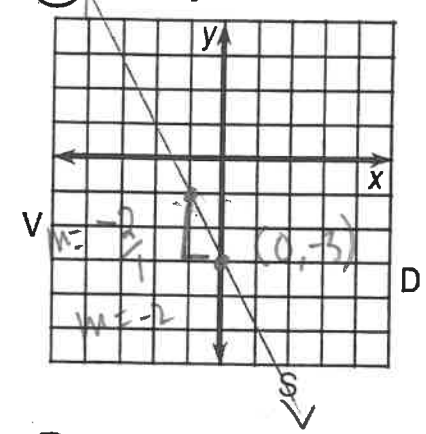
① $-3x + 2y = 2$



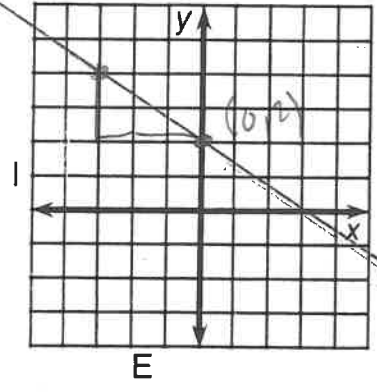
② $x - 4y = 8$



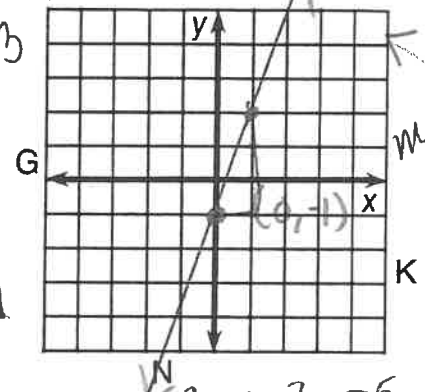
③ $2x + y = -3$



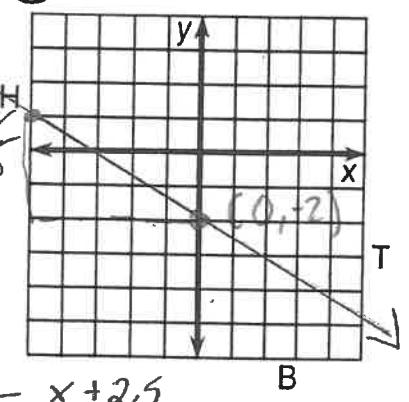
④ $2x + 3y = 6$



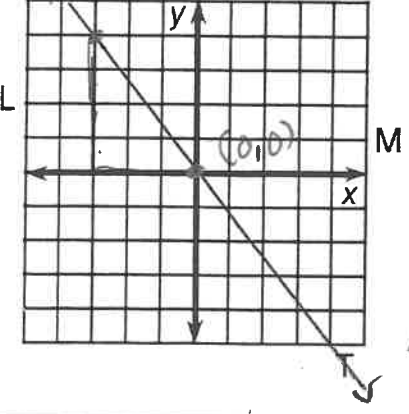
⑤ $3x - y = 1$



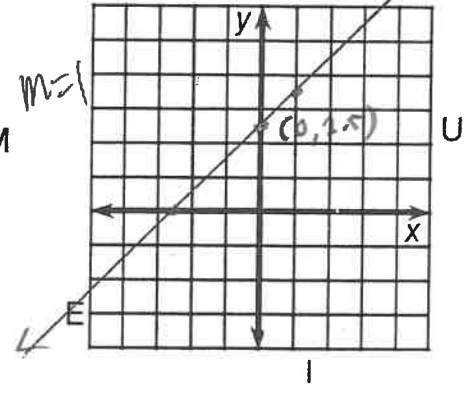
⑥ $-3x - 5y = 10$



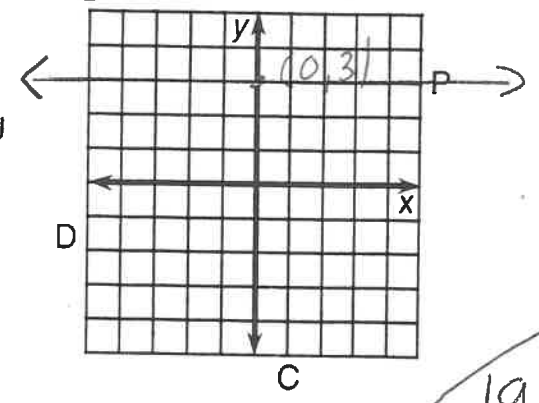
⑦ $4x + 3y = 0$



⑧ $2x - 2y + 5 = 0$



⑨ $y - 3 = 0$ $m = 0$



6	8	6	4	3	5	2	9	1	2	9	8	1	7	8	4
H	E	H	A	S	N	O	P	R	O	P	E	R	T	E	A

19